

SL.NO:2011

SUBJECT CODE:34421E03

**VINAYAKA MISSIONS RESEARCH FOUNDATION**  
**(Deemed to be University)**  
**B.E./ B.TECH DEGREE EXAMINATIONS- APRIL -2022**  
**MECHANICAL ENGINEERING**

**MANUFACTURING ENGINEERING FOR PHARMACEUTICAL ENGINEERS**

Time : Three Hours

Maximum Marks:100 Marks

Answer **ALL** questions  
**Part-A (10 x 2 =20 Marks)**

- 1 Define casting.
- 2 Interpret the purpose of vent in casting.
- 3 Name types of welding.
- 4 Discuss the color of cylinders and type of threads used in gas welding.
- 5 Recall the expanded form of USM.
- 6 Differentiate between grooving and reaming.
- 7 Relate the advantage of plastics in our daily life.
- 8 Explain the commencement of use of plastics and adopted by America in 1869..
- 9 Define rolling.
- 10 Differentiate between forming and powder metallurgy.

Answer **Any FIVE** questions  
**Part-B (5 x10 =50 Marks)**

- 11 a. Interpret in detail the advantages of casting process.  
**OR**  
b. Demonstrate the difference between lost wax casting and sand casting.
- 12 a. The sand used in casting process is not green in color. Illustrate with percentage of constituents in green sand.  
**OR**  
b. Generalize in detail any five main components used in gas welding.
- 13 a. Interpret in detail the advantages and disadvantages of Sheet Metal Arc Welding (SMAW).  
**OR**  
b. Applying the concept, explain the advantages of Gas Tungsten Arc Welding (GTAW).
- 14 a. Generalize in detail about cutting tools and types of chips formed during machining process.  
**OR**  
b. Applying the concept, explain the working of a CNC plasma cutter.

p.t.o

- 15 a. Interpret in detail the working of abrasive jet machining.  
**OR**  
b. Generalize in detail about injection moulding and blow moulding process for production of plastics.
- 16 a. Demonstrate the the difference between fillers and plasticizers used as additives in plastics.  
**OR**  
b. Applying the concept, explain natural, semi-synthetic and synthetic plastics.
- 17 a. Illustrate the classification of basic sheet forming processes.  
**OR**  
b. Generalize in detail about forging die with a neat labelled diagram and explain the terms.
- 18 a. Interpret in detail about the process of swaging and use of mandrel.  
**OR**  
b. Applying the concept, explain the advantages and limitations of powder metallurgy.

**Answer ALL questions**

**PART-C (2 x 15 = 30 )**

- 19 a. Operationalize in detail the general as well as specific precautions to be observed in casting process.  
**OR**  
b. Illustrate the importance of charcoal in producing flammable gas in gas welding process and generalize the safety precautions to be observed in welding process.
- 20 a. Employ the principle in explaining working of laser beam machining.  
**OR**  
b. Apply the principle to explain plastic anisotropy and the importance of plastic strain ratio in forming sheets using stretch forming.

\*\*\*\*\*

SL.NO:2213

SUBJECT CODE:34421C03

**VINAYAKA MISSIONS RESEARCH FOUNDATION**  
**(Deemed to be University)**  
**B.E./ B.TECH DEGREE EXAMINATIONS- APRIL -2022**  
**MECHANICAL ENGINEERING**  
**FIRST SEMESTER**  
**MECHANICAL BEHAVIOUR OF MATERIALS AND**  
**METALLURGY**

Time : Three Hours

Maximum Marks:100 Marks

Answer **ALL** questions  
**Part-A (10 x 2 =20 Marks)**

- 1 The tempering process usually follows hardening process. Justify.
- 2 List out the different types of tool steel.
- 3 Define the terms brittleness.
- 4 Define the term of rust.
- 5 List the types of polymers.
- 6 Discuss why ferrous alloys are used extensively.
- 7 Differentiate between normalizing and full annealing.
- 8 Determine when caustic embrittlement occurred in boiler plate.
- 9 Discuss why powder metallurgy is preferred over other manufacturing methods.
- 10 List the advantages of silicon di oxide.

Answer **Any FIVE** questions  
**Part-B (5 x10 =50 Marks)**

- 11 a. Explain with neat the allotropic forms of iron.  

**OR**

b. Determine and detail about the effect of alloying elements adding to steel.
- 12 a. Illustrate with neat diagram and explain how to conduct fatigue test for the engineering materials.  

**OR**

b. Illustrate and explain how to conduct vickers hardness test.
- 13 a. Illustrate and explain in detail about hardening and tempering process of heat treatment.  

**OR**

b. Illustrate corrosion and discuss various types of corrosion usually encountered.

- 14 a. Discuss about the properties and typical application of the following (i). PVC (ii). PEEK (iii). Polyethylene

**OR**

- b. Describe the process of powder metallurgy method that used to produce automobile parts.

- 15 a. Discuss the composition, properties and applications of aluminium based alloys.

**OR**

- b. Explain the following materials in terms of composition, properties and applications. (i) Ferritic stainless steel (ii) Austenitic stainless steel.

- 16 a. Discuss the micro-constituents of iron-carbon alloys? Explain the general characteristics of each in detail.

**OR**

- b. Describe the mechanisms of plastic deformation of metals by slip and twinning.

- 17 a. List the advantages , disadvantages and application of flame hardening

**OR**

- b. Explain about austempering heat treatment processes

- 18 a. Describe any one manufacturing methods of metal matrix composites.

**OR**

- b. Explain any one manufacturing methods of ceramic matrix composites.

**Answer ALL questions**

**PART-C (2 x 15 = 30 )**

- 19 a. Compare slip and twinning mechanism of plastic deformation in detail

**OR**

- b. How to conduct toughness test explain any one in detail with neat sketch.

- 20 a. List the hardness test and explain any two with neat sketch.

**OR**

- b. Describe the following heat treatment of steel. (i) Cyaniding (ii) Carbo nitriding (iii) Induction hardening

\*\*\*\*\*

**VINAYAKA MISSIONS RESEARCH FOUNDATION**  
**(Deemed to be University)**  
**B.E./B.TECH DEGREE EXAMINATIONS- APRIL- 2022**  
**COMMON TO CIVIL , EEE AND MEET**  
**BASICS OF CIVIL AND MECHANICAL ENGINEERING**  
(Candidates admitted under 2021 Regulations-SCBCS)

Time : 1 1/2 Hours

Maximum Marks:50 Marks

**BASIC CIVIL ENGINEERING**

Answer **ALL** questions

**Part-A (5 x 2 =10 Marks)**

- 1 What are the essential constituents of a good brick earth?
- 2 What is curing?
- 3 Define Strain
- 4 What is mean by leveling?
- 5 Write short notes on Shell roof.

Answer **ALL** questions

**Part-B (2 x12 =24 Marks)**

- 6 a. Explain different types of cement.

**OR**

- b. Describe in detail about Various ingredients of cement and their functions.

- 7 a. Explain in detail different types of Bridges.

**OR**

- b. Explain in detail about the forces acting on the dam.

Answer **ALL** questions

**PART-C (1 x 16 = 16 )**

- 8 a. Describe briefly with a neat sketch and explain the manufacture of Portland cement by wet process.

**OR**

- b. Explain briefly the various components of a building.

\*\*\*\*\*

**BASIC MECHANICAL ENGINEERING**

(Candidates admitted under 2021 Regulations-SCBCS)

Time : 1 1/2 Hours

Maximum Marks:50 Marks

Answer **ALL** questions**Part-A (5 x 2 =10 Marks)**

- 1 Define friction.
- 2 Define degrees of freedom.
- 3 What is mean by Absolute pressure?
- 4 Define the term Turbulent flow.
- 5 What is rolling?

Answer **ALL** questions**Part-B (2 x12 =24 Marks)**

- 6 a. Explain the working principle of four stroke SI engine.
- OR**
- b. Draw a neat sketch of a simple vapour compression refrigeration system and explain its principle of operation.

- 7 a. Explain with neat sketches any 5 safety equipments and its applications.

**OR**

- b. Explain various selection criteria of a hydraulic fluid in detail.

Answer **ALL** questions**PART-C (1 x 16 = 16 )**

- 8 a. 3 A 30 cm x15 cm venturimeter is provided in a vertical pipe line carrying oil of specific gravity of 0.9 floe being up wards .the difference elevation of the throat and entrance of the venturimeter is 25 cm.  
Calculate: 1) the discharge of oil and 2)the pressure difference between the throat and entrance section. Cd = 0.98.

**OR**

- b. Compare and contrast Hot Rolling and Cold Rolling.

\*\*\*\*\*

SL.NO:2212

SUBJECT CODE:34421C02

**VINAYAKA MISSIONS RESEARCH FOUNDATION**  
**(Deemed to be University)**  
**B.E./ B.TECH DEGREE EXAMINATIONS- APRIL -2022**  
**MECHANICAL ENGINEERING**  
**FIRST SEMESTER**  
**MANUFACTURING PROCESSES**

Time : Three Hours

Maximum Marks:100 Marks

Answer **ALL** questions  
**Part-A (10 x 2 =20 Marks)**

- 1 How do you classify manufacturing processes?
- 2 List any two differences between cold-chamber die-casting and hot-chamber die casting.
- 3 Why cleaning of the joint is important before welding?
- 4 Why is the tungsten inert-gas welding preferred for welding aluminum plates?
- 5 List the assumptions made in Merchant Circle diagram.
- 6 List any four principle parts of a shaper.
- 7 What is G-code in CNC programming?
- 8 What is drawing down operation in forging?
- 9 Define the term spring back.
- 10 What are the limitations of additive manufacturing?

Answer **Any FIVE** questions  
**Part-B (5 x10 =50 Marks)**

- 11 a. List the factors to be considered for designing a good pattern.  
**OR**  
b. Explain the different characteristics of molding sand.
- 12 a. Explain the various zone in cupola furnace with neat sketch.  
**OR**  
b. Explain the different types of flame obtained with its characteristics and applications.
- 13 a. Illustrate about welding torch with neat sketch.  
**OR**  
b. Illustrate the process of seam welding and list the applications.
- 14 a. Outline the parameters that influence the life of tool.  
**OR**  
b. Illustrate orthogonal cutting and oblique cutting with necessary diagrams and compare.
- 15 a. Explain the properties of good cutting fluid.  
**OR**

**(P.T.O)**

b. Examine the factors affecting tool life in detail.

16 a. Explain the various types of chucks with neat sketch.

**OR**

b. Explain the different types of cutting tools used in lathe.

17 a. Explain any four milling operations with neat sketch.

**OR**

b. Explain the operational steps of Rolling of square sections, rounds, plate, sheet and strip from a stock. Draw sketches wherever necessary.

18 a. Illustrate the impact extrusion process with neat sketch.

**OR**

b. List the applications of Additive Manufacturing Technology.

**Answer ALL questions**

**PART-C (2 x 15 = 30 )**

19 a. Illustrate the various casting defects and suggest suitable remedies.

**OR**

b. Explain the forehand and backhand gas welding methods. State its advantages and disadvantages.

20 a. Explain the working principle of radial drilling machine with neat sketch.

**OR**

b. Illustrate the Electromagnetic forming with a neat sketch.

\*\*\*\*\*



**VINAYAKA MISSION'S RESEARCH FOUNDATION**  
**(Deemed to be University)**  
**B.E.DEGREE EXAMINATIONS- APRIL - 2022**  
**COMMON TO ALL BRANCHES**  
**PHYSICAL SCIENCES**

(Candidates admitted under 2021 Regulations-SCBCS)

Time : 1 1/2 Hours

Maximum Marks:50 Marks

**PART A - ENGINEERING PHYSICS**

Answer **ALL** questions

**Part-A (5 x 2 =10 Marks)**

- 1 Recognize the characteristics of laser.
- 2 Schedule any two applications of holography.
- 3 Tell about the characteristics of graded index multimode fiber.
- 4 Express about piezo-electric effect.
- 5 Schedule the Industrial applications of ultrasonic waves

Answer **Any FIVE** questions

**Part-B (2 x12 =24 Marks)**

- 6 a. Predict the applications of laser in communication, military and chemical fields.  
**OR**
- b. Express the various types of fibers based on refractive index profile.
- 7 a. Practice obtaining the expression for velocity of SONAR.  
**OR**
- b. Interpret the biological and chemical applications of ultrasonics.

Answer **ALL** questions

**PART-C (1 x 16 = 16 )**

- 8 a. Tell about holography. Illustrate the construction and working of holography with neat diagram.  
**OR**
- b. Demonstrate piezo- electric effect? Explain with a neat circuit, the generation of ultrasonic using a piezo- electric oscillator.

\*\*\*\*\*

**PART B - ENGINEERING CHEMISTRY**  
(Candidates admitted under 2021 Regulations-SCBCS)

Time : 1 1/2 Hours

Maximum Marks:50 Marks

Answer **ALL** questions  
**Part-A (5 x 2 =10 Marks)**

- 1 What is EDTA? Write its structure?
- 2 How calgon conditioning is superior than other methods?
- 3 Define electrochemical series.
- 4 State pilling bed worth rule.
- 5 Recall cetane number.

Answer **Any FIVE** questions  
**Part-B (2 x12 =24 Marks)**

- 6 a. How is exhausted resin regenerated in an ion-exchanger? What are merits and demerits of ion-exchange method?

**OR**

- b. List out the various water quality parameters for the drinking water.

- 7 a. Discuss about electrochemical series and their applications.

**OR**

- b. What is power alcohol? Explain its manufacture, properties of power alcohol.

Answer **ALL** questions  
**PART-C (1 x 16 = 16)**

- 8 a. How is internal treatment of boiler water carried out using phosphate, Carbonate, Sodium aluminate and calgon conditioning?

**OR**

- b. Explain Otto-Hoffman's by product oven method for manufacture of metallurgical coal.

\*\*\*\*\*

**VINAYAKA MISSIONS RESEARCH FOUNDATION**  
**(Deemed to be University)**  
**B.E./ B.TECH DEGREE EXAMINATIONS- APRIL -2022**  
**CIVIL ENGINEERING**  
**FIRST SEMESTER**  
**ENGINEERING MECHANICS**  
(Candidates admitted under 2021 Regulations-SCBCS)

Time : Three Hours

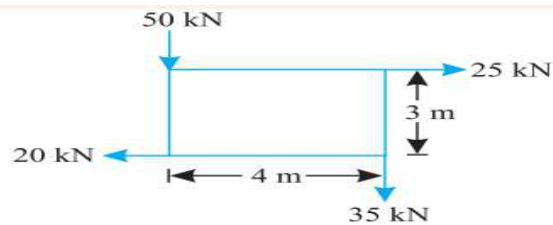
Maximum Marks:100 Marks

Answer **ALL** questions  
**Part-A (10 x 2 =20 Marks)**

- 1 Define the Resolution of a force.
- 2 Define Motion
- 3 List out the types of beams.
- 4 Define hinged supported beams.
- 5 Define parallel axis theorem.
- 6 Define the principal moment of inertia.
- 7 What is Coulomb's law of friction?
- 8 Define velocity ratio.
- 9 Define Impulsive force.
- 10 List out the types of collisions.

Answer **Any FIVE** questions  
**Part-B (5 x10 =50 Marks)**

- 11 a. A system of forces is acting at the corners of a rectangular block as shown in Fig. Determine the magnitude and direction of the resultant force.

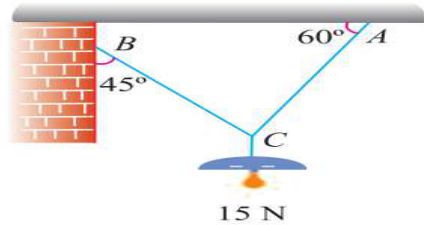


**OR**

- b. The following forces are acting at a point:
- (i) 20 N inclined at  $30^\circ$  towards North of East,
  - (ii) 25 N towards North,
  - (iii) 30 N towards North West, and
  - (iv) 35 N inclined at  $40^\circ$  towards South of West.
- Calculate the magnitude and the direction of the resultant force.

(P.T.O)

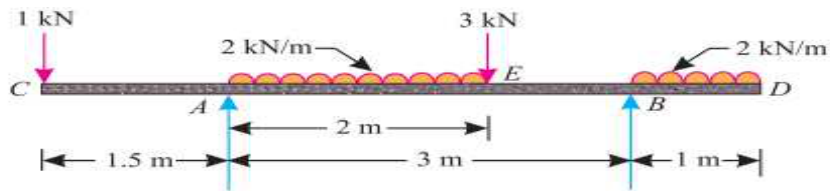
- 12 a. An electric light fixture weighing 15 N hangs from a point C, by two strings AC and BC. The string AC is inclined at  $60^\circ$  to the horizontal and BC at  $45^\circ$  to the horizontal as shown in Fig. Using Lami's theorem, or otherwise, determine the forces in the strings AC and BC.



**OR**

- b. The three parallel forces +20N, -10N, and +30N are acting in a plane as shown in the figure. Calculate a) The magnitude of the resultant force, b) The location of the resultant. All dimensions are in centimetre

- 13 a. A beam AB of span 3m, overhanging on both sides is loaded as shown in Fig. Determine the reactions at the supports A and B.

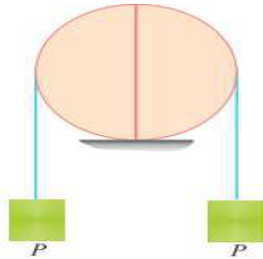


(P.T.O)

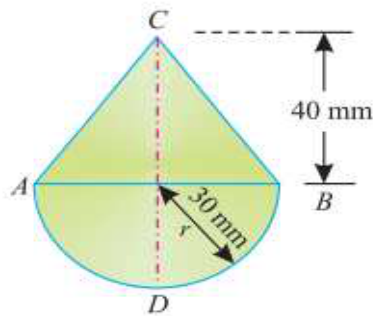
SL.NO:2221-A

OR

- b. The two halves of a round homogeneous cylinder are held together by a thread wrapped around the cylinder with two weights each equal to  $P$  attached to its ends as shown in Fig. The complete cylinder weighs  $W$  newton. The plane of contact, of both of its halves, is vertical. Determine the minimum value of  $P$ , for which both halves of the cylinder will be in equilibrium on a horizontal plane.

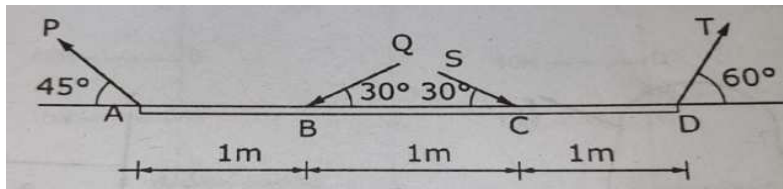


- 14 a. A body consists of a right circular solid cone of height 40 mm and radius 30 mm placed on a solid hemisphere of radius 30 mm of the same material. Determine the position of the centre of gravity of the body.



OR

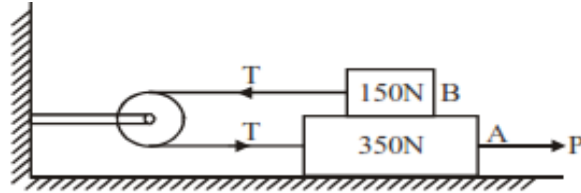
- b. An ABCD is a weightless rod under the action of four forces  $P$ ,  $Q$ ,  $S$ , and  $T$  as shown in fig. If  $P=10\text{N}$ ,  $Q=4\text{N}$ ,  $S=8\text{N}$ , and  $T=12\text{N}$ , calculate the resultant and mark the same in direction with respect to the end A of the rod.



(P.T.O)

SL.NO:2221-A

- 15 a. A block 'A' weighing 350N resting on a rough horizontal floor supports a block B weighing 150N. The two blocks are connected to a string passing over round a smooth pulley as shown in the figure. Find what horizontal force P has to be applied and block A so as to just move it towards the right. Take  $\mu = 0.25$  at all contact surfaces. Determine the tension in the string.



**OR**

- b. In a flat belt, the maximum tension is 1160N, and the angle of the lap is  $170^\circ$ . The coefficient of friction between the belt and pulley is 0.25. The diameter of the pulley is 90cm and it runs at 540 rpm. Calculate the power transmitted at the above speed. Neglect the effect of centrifugal tension.
- 16 a. A body is thrown vertically upwards with a velocity of 28 m/s. Determine the distance it will cover in 2 seconds.

**OR**

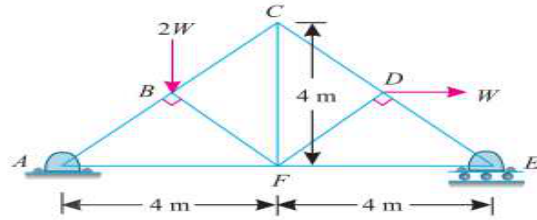
- b. Determine the centroid of the shaded area shown in the fig. (All dimensions are in mm.)

- 17 a. If a particle is projected inside a horizontal tunnel which is 5 meters high with a velocity of 60 m/s, Determine the angle of projection and the greatest possible range.

**OR**

- b. A car is moving at 72 k.m.p.h., If the wheels are 75 cm diameter, find the angular velocity of the tyre about its axis. If the car comes to rest in a distance of 20 meters, under a uniform retardation, Determine angular retardation of the wheels

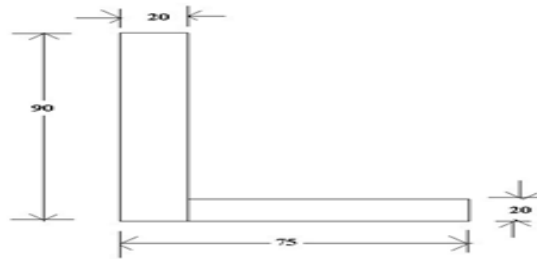
- 18 a. A truss of 8 m span and 4 m height is loaded as shown in Fig . Determine the reactions at A and E.



OR

b.

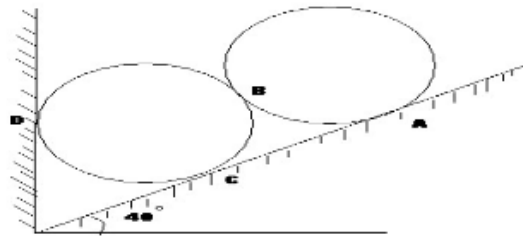
Calculate the moment of inertia about the centroidal X-X and Y-Y axis of the angle section shown in the fig. All dimensions are in mm



**Answer ALL questions**

**PART-C (2 x 15 = 30 )**

- 19 a. The two identical rollers each weighing 200N are placed in a trough as shown in fig. assuming all the surfaces of contact are smooth, determine the reactions developed at the point of contact surfaces.

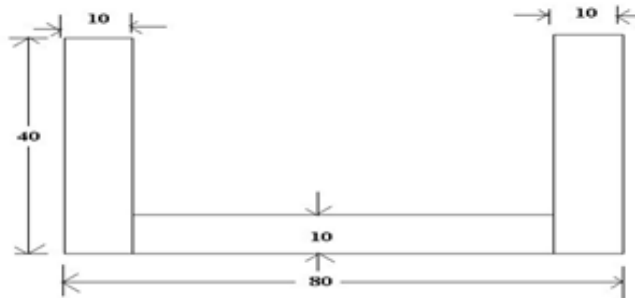


(P.T.O)

OR

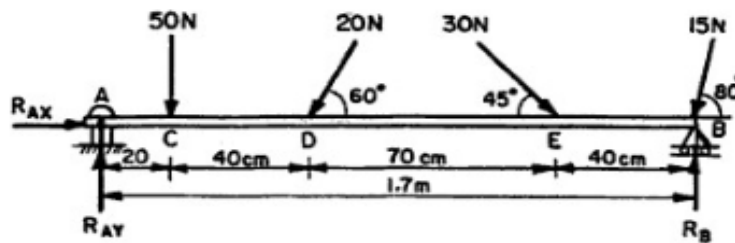
- b. The three forces and a couple of magnitudes,  $M = 18 \text{ Nm}$  are applied to an angled bracket as shown in fig. Determine a) the resultant of this system of forces b) Locate the points where the line of action of the resultant intersects line AB and line BC.

- 20 a. Determine the moment of inertia of a T-section shown in the fig about the X-X and Y-Y axis passing through C.G of the section. All dimensions are in mm.



OR

- b. A beam AB of span 1.7 m is hinged at A and supported on rollers at end B and carries the load as shown in fig. Determine the reaction at A and B.



\*\*\*\*\*



**VINAYAKA MISSIONS RESEARCH FOUNDATION**  
**(Deemed to be University)**  
**B.E./ B.TECH DEGREE EXAMINATIONS- APRIL -2022**  
**MECHANICAL ENGINEERING/CIVIL ENGINEERING**  
**FIRST SEMESTER**  
**ENGINEERING MECHANICS (Statics and Dynamics)**  
(Candidates admitted under 2021 Regulations-SCBCS)

Time : Three Hours

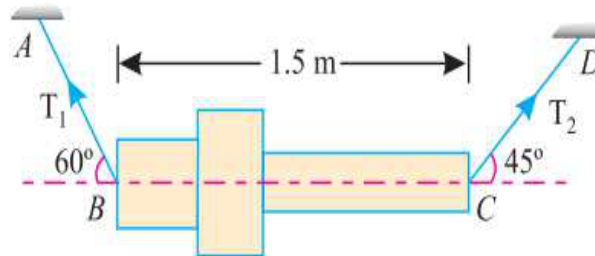
Maximum Marks:100 Marks

Answer **ALL** questions  
**Part-A (10 x 2 =20 Marks)**

- 1 Define Concurrent forces.
- 2 Define the Resolution of a force.
- 3 Define Knife-edge support.
- 4 Define Roller supports.
- 5 Define the moment of inertia.
- 6 Define principal axes.
- 7 Define sliding friction.
- 8 Define Potential energy
- 9 Define Impulsive force.
- 10 Define relative motion.

Answer **Any FIVE** questions  
**Part-B (5 x10 =50 Marks)**

- 11 a. A machine component 1.5 m long and weight 1000 N is supported by two ropes AB and CD as shown in Fig. Calculate the tensions  $T_1$  and  $T_2$  in the ropes AB and CD.

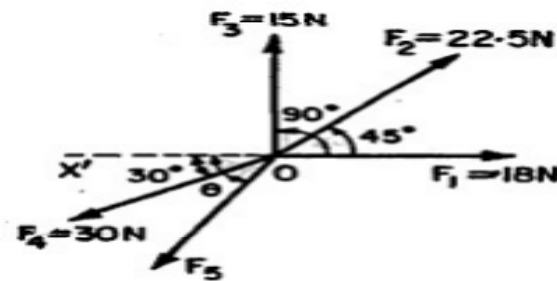


(P.T.O)

OR

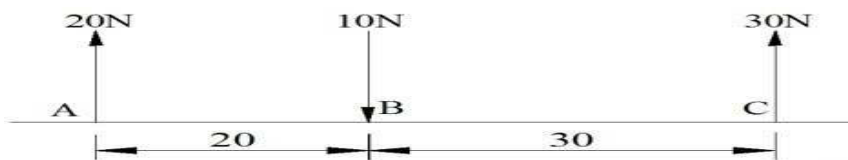
- b. The following forces are acting at a point:
- (i) 20 N inclined at  $30^\circ$  towards North of East,
  - (ii) 25 N towards North,
  - (iii) 30 N towards North West, and
  - (iv) 35 N inclined at  $40^\circ$  towards South of West.
- Calculate the magnitude and the direction of the resultant force.

- 12 a. The five forces  $F_1, F_2, F_3, F_4,$  and  $F_5$  are acting at a point on a body as shown in fig. and the body is in equilibrium, If  $F_1 = 18\text{ N}, F_2 = 22.5\text{ N}, F_3 = 15\text{ N}$  and  $F_4 = 30\text{ N}$ , determine the force  $F_5$  in magnitude and direction.

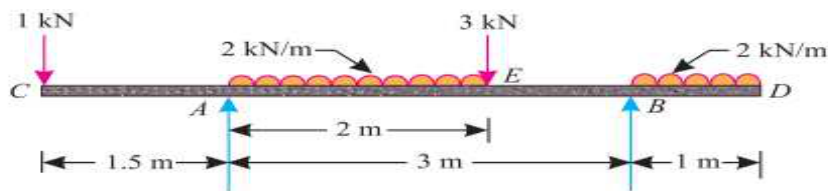


OR

- b. The three parallel forces  $+20\text{N}, -10\text{N},$  and  $+30\text{N}$  are acting in a plane as shown in the figure. Calculate a) The magnitude of the resultant force, b) The location of the resultant. All dimensions are in centimetre



- 13 a. A beam  $AB$  of span  $3\text{m}$ , overhanging on both sides is loaded as shown in Fig. Determine the reactions at the supports  $A$  and  $B$ .

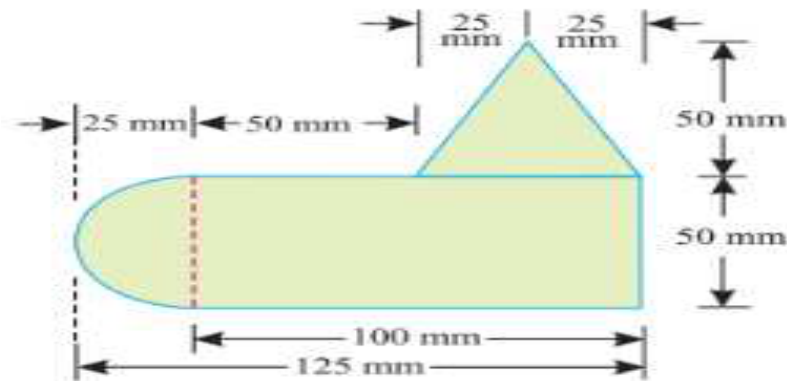


(P.T.O)

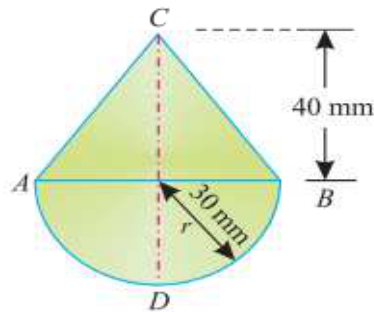
SL.NO:2221

3  
OR

b. Determine the centre of gravity of the given lamina shown in fig. All dimensions are in mm.



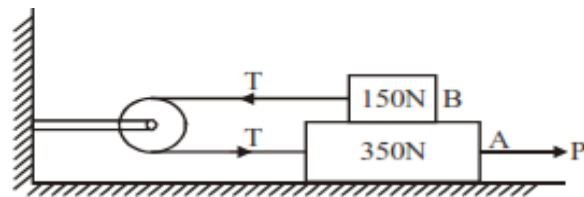
14 a. A body consists of a right circular solid cone of height 40 mm and radius 30 mm placed on a solid hemisphere of radius 30 mm of the same material. Determine the position of the centre of gravity of the body.



OR

b. A screw jack has a thread of 10 mm pitch. Calculate the effort applied at the end of a handle 400 mm long will be required to lift a load of 2 kN if the efficiency at this load is 45%.

15 a. A block 'A' weighing 350N resting on a rough horizontal floor supports a block B weighing 150N. The two blocks are connected to a string passing over round a smooth pulley as shown in the figure. Find what horizontal force P has to be applied and block A so as to just move it towards the right. Take  $\mu = 0.25$  at all contact surfaces. Determine the tension in the string.



(P.T.O)

SL.NO:2221

OR

- b. In a flat belt, the maximum tension is 1160N, and the angle of the lap is  $170^\circ$ . The coefficient of friction between the belt and pulley is 0.25. The diameter of the pulley is 90cm and it runs at 540 rpm. Calculate the power transmitted at the above speed. Neglect the effect of centrifugal tension.

- 16 a. A body is thrown vertically upwards with a velocity of 28 m/s. Determine the distance it will cover in 2 seconds.

OR

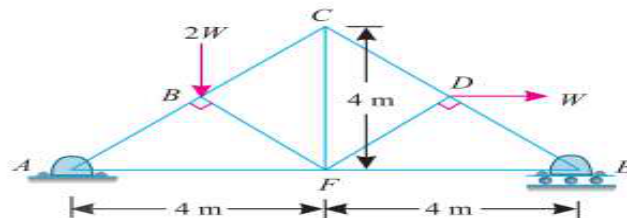
- b. A stone was thrown vertically upwards from the ground with a velocity of 49 m/sec. After 2 seconds, another stone was thrown vertically upwards from the same place. If both the stones strike the ground at the same time, Determine the velocity with which the second stone was thrown. Take  $g = 9.8 \text{ m/sec}^2$ .

- 17 a. If a particle is projected inside a horizontal tunnel which is 5 meters high with a velocity of 60 m/s, Determine the angle of projection and the greatest possible range.

OR

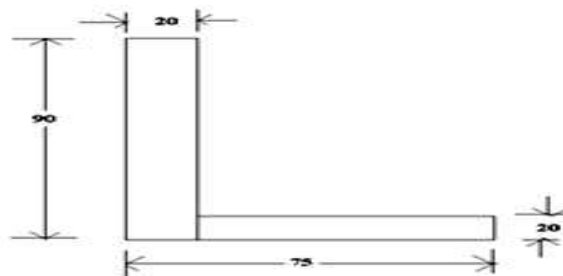
- b. A car is moving at 72 k.m.p.h., If the wheels are 75 cm diameter, find the angular velocity of the tyre about its axis. If the car comes to rest in a distance of 20 meters, under a uniform retardation, Determine angular retardation of the wheels

- 18 a. A truss of 8 m span and 4 m height is loaded as shown in Fig . Determine the reactions at A and E.



OR

- b. Calculate the moment of inertia about the centroidal X-X and Y-Y axis of the angle section shown in the fig. All dimensions are in mm

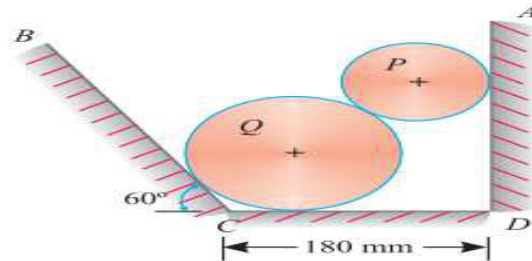


(P.T.O)

SL.NO:2221

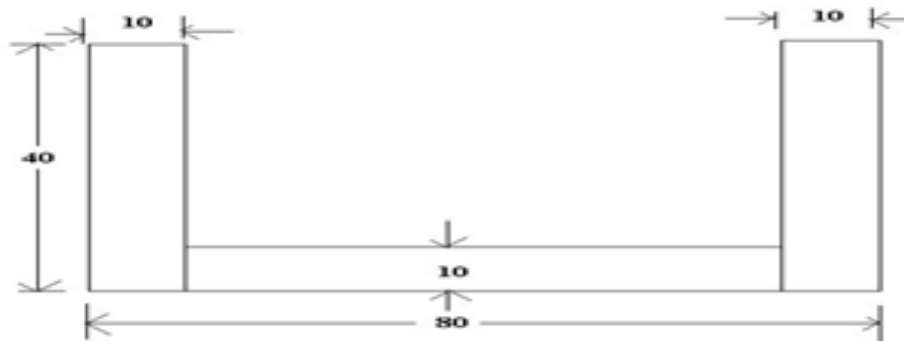
**Answer ALL questions****PART-C (2 x 15 = 30)**

- 19 a. The two cylinders P and Q rest in a channel as shown in Fig. The cylinder P has a diameter of 100 mm and weighs 200 N, whereas the cylinder Q has a diameter of 180 mm and weighs 500 N. If the bottom width of the box is 180 mm, with one side vertical and the other inclined at  $60^\circ$ , determine the pressures at all the four points of contact.

**OR**

- b. The three forces and a couple of magnitudes,  $M = 18 \text{ Nm}$  are applied to an angled bracket as shown in fig. Determine a) the resultant of this system of forces b) Locate the points where the line of action of the resultant intersects line AB and line BC.

- 20 a. Determine the moment of inertia of a T-section shown in the fig about the X-X and Y-Y axis passing through C.G of the section. All dimensions are in mm.



(P.T.O)

SL.NO:2221

**OR**

b.

A ladder 5 meters long rests on horizontal ground and leans against a smooth vertical wall at an angle of  $70^\circ$  with the horizontal. The weight of the ladder is 900 N and acts at its middle. The ladder is at the point of sliding when a man weighing 750N stands on a rung 1.5 meters from the bottom of the ladder. Calculate the coefficient of friction between the ladder and the floor.

\*\*\*\*\*

SL.NO:2221